

# Worksheet – Balancing Equations

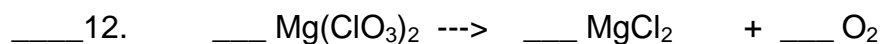
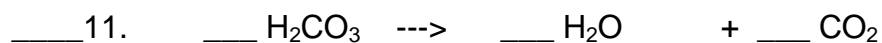
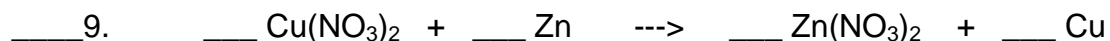
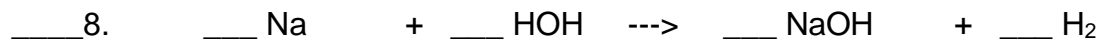
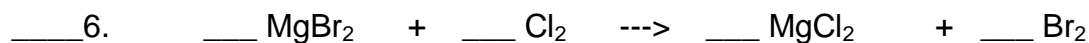
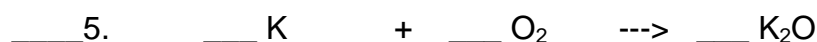
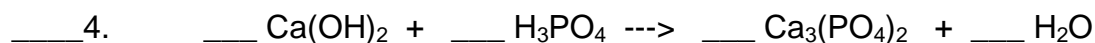
Ch 10.1 Std 3a

Name: \_\_\_\_\_


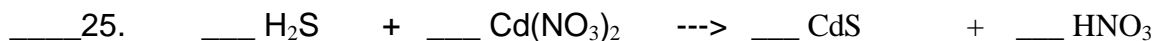
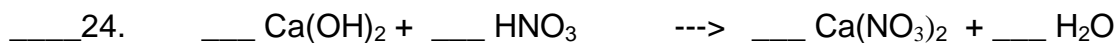

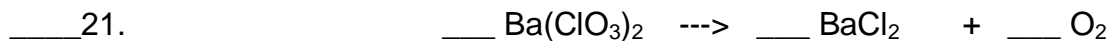
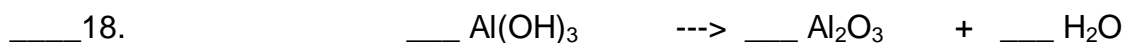
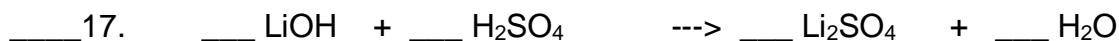

Period: \_\_\_\_\_

Date: \_\_\_\_\_

**Directions:** Fill in the blanks to balance each of the following equations. If coefficient is one, you must put the #1 in the blank. Blanks to left of the number of the equation will be completed as another assignment tomorrow.



**Balancing Equations** more practice (cont'd)



[Worksheet Answers](#)